

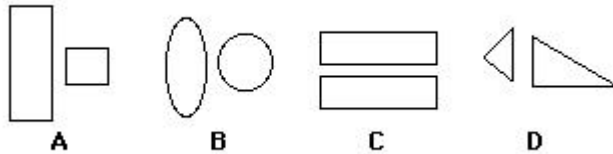
3rd Math 3.2b

Name: _____

Class: _____

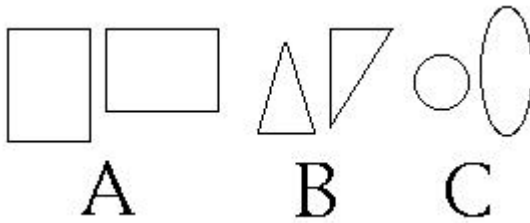
Date: _____

1. Which pair of figures is congruent?



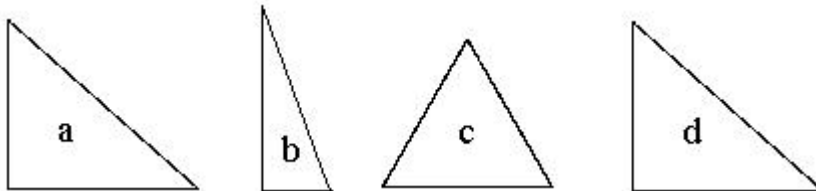
- A. A
B. B
C. C
D. D

2. Which pair of figures is congruent?



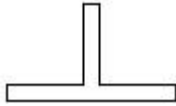
- A. A
B. B
C. C
D. none of the above

3. Which shapes are congruent?



- A. shapes a and d
B. shapes a and b
C. shapes b and d
D. shapes c and d

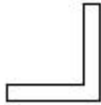
4. Which shape is congruent to the shape below?



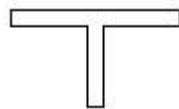
A.



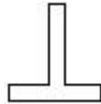
B.



C.




D.



5. Which of the following figures is congruent to the shaded figure?



A



B



C

A. A

B. B

C. C

D. none of the above


6. Which pair of figures is congruent?



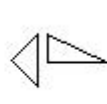
A



B



C



D

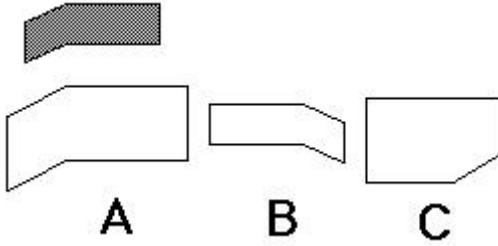
A. A

B. B

C. C

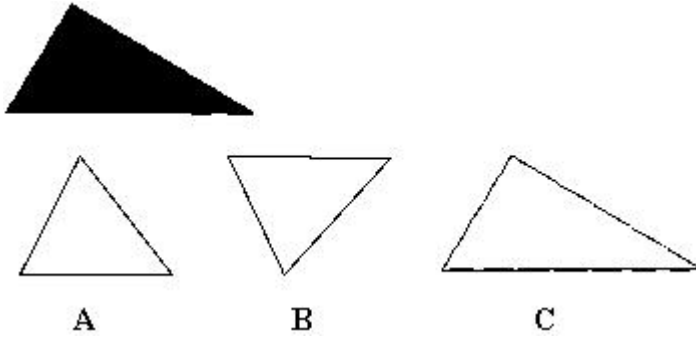
D. D

7. Which of the following figures is congruent with the shaded figure?



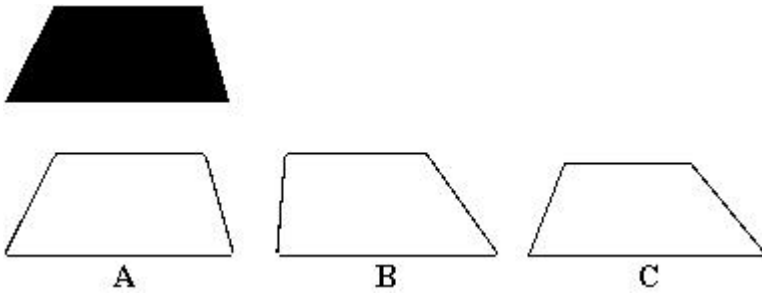
- A. A
B. B
C. C
D. none of the above

8. Which figure is congruent with the shaded figure?



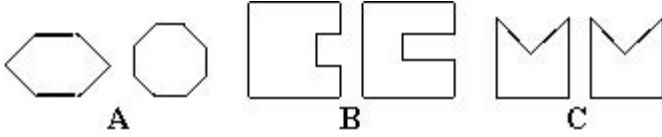
- A. A
B. B
C. C
D. none of the above

9. Which figure is congruent with the shaded figure?



- A. A
B. B
C. C
D. none of the above

10. Which pair of figures is congruent?



- A. A
- B. B
- C. C
- D. none of these